

Name _____

Hour _____

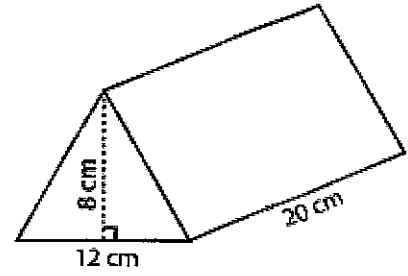
Find the surface area of each prism.

1) Place the area of each surface on the line.

Base: _____ x 2 = _____

Side : _____ x 3 = _____

Surface area _____

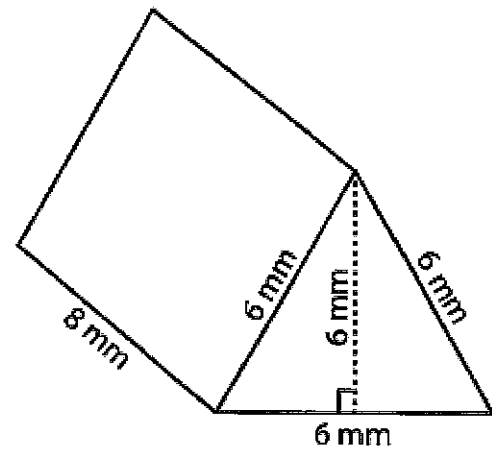


2) Place the area of each surface on the line.

Base: _____ x 2 = _____

Side : _____ x 3 = _____

Surface area _____

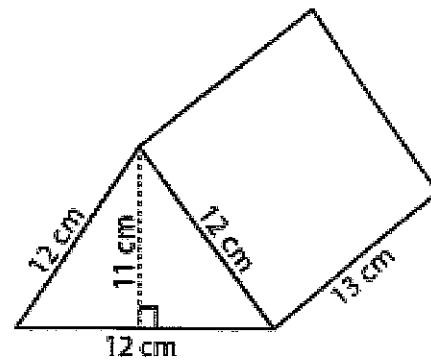


3) Place the area of each surface on the line.

Base: _____ x 2 = _____

Sides: _____ x 3 = _____

Surface area _____

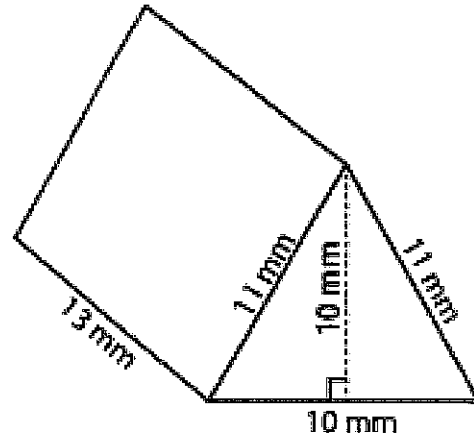


4) Place the area of each surface on the line.

Base: _____ x 2 = _____

Side: _____ x 3 = _____

Surface area _____

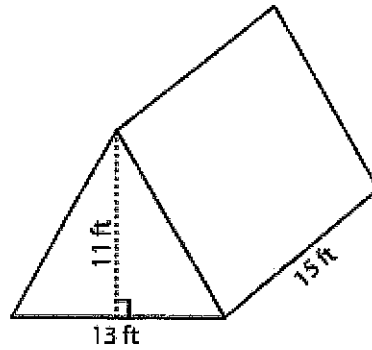


5) Place the area of each surface on the line.

Base: _____ x 2 = _____

Side: _____ x 3 = _____

Surface area _____

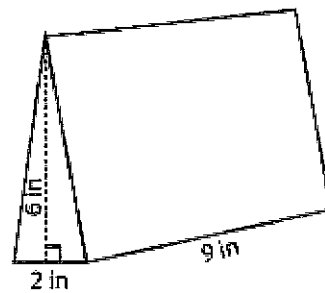


6) Place the area of each surface on the line.

Base: _____ x 2 = _____

Side: _____ x 3 = _____

Surface area _____



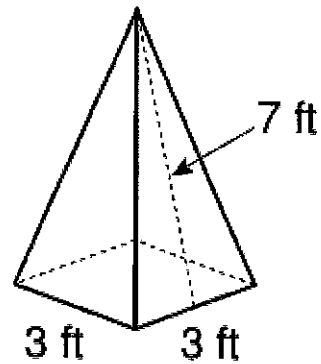
Find the surface area of each figure.

1) Place the area of each surface on the line.

Base: _____ = _____

Side : _____ x 4 = _____

Surface area _____

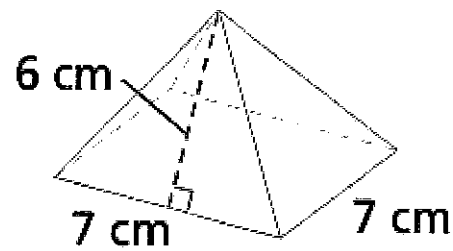


2) Place the area of each surface on the line.

Base: _____ = _____

Side : _____ x 4 = _____

Surface area _____

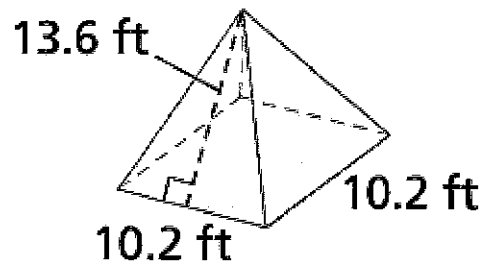


3) Place the area of each surface on the line.

Base: _____ = _____

Side : _____ x 4 = _____

Surface area _____

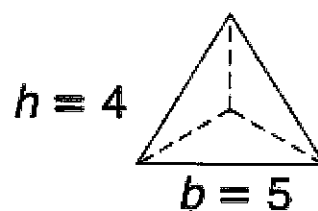


4) Place the area of each surface on the line.

Base: _____ = _____

Side : _____ x 3 = _____

Surface area _____



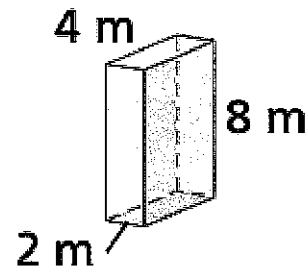
5) Place the area of each surface on the line.

Front: _____ x 2 = _____

Top: _____ x 2 = _____

Side: _____ x 2 = _____

Surface area _____



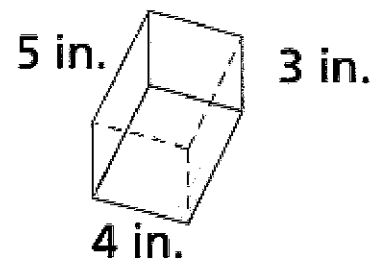
6) Place the area of each surface on the line.

Front: _____ x 2 = _____

Top: _____ x 2 = _____

Side: _____ x 2 = _____

Surface area _____



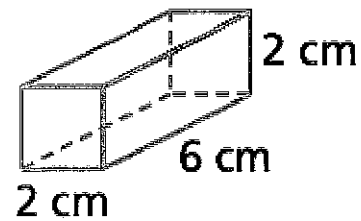
7) Place the area of each surface on the line.

Front: _____ x 2 = _____

Top: _____ x 2 = _____

Side: _____ x 2 = _____

Surface area _____



8) Place the area of each surface on the line.

Front: _____ x 2 = _____

Top: _____ x 2 = _____

Side: _____ x 2 = _____

Surface area _____

