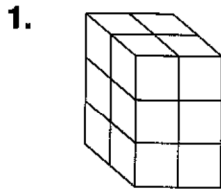
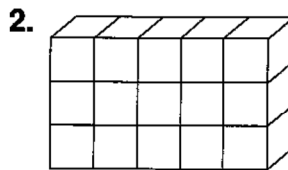


**LESSON** **Practice C**  
**10-2** *Volume of Prisms and Cylinders*

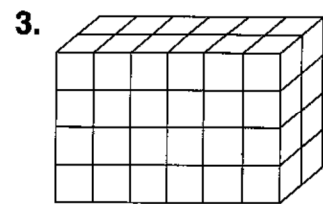
Find how many cubes each prism holds. Then give the prism's volume to the nearest tenth.



\_\_\_\_\_  
 \_\_\_\_\_

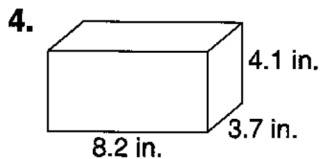


\_\_\_\_\_  
 \_\_\_\_\_

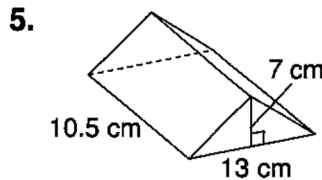


\_\_\_\_\_  
 \_\_\_\_\_

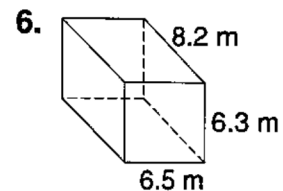
Find the volume of each figure to the nearest tenth.



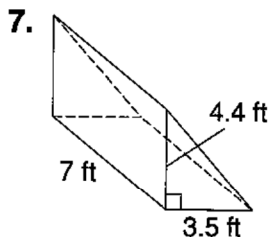
\_\_\_\_\_



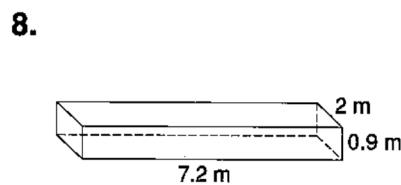
\_\_\_\_\_



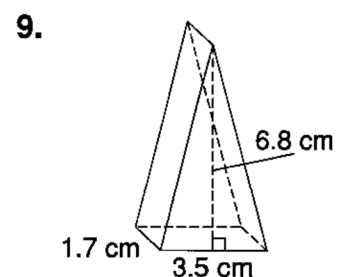
\_\_\_\_\_



\_\_\_\_\_



\_\_\_\_\_



\_\_\_\_\_

10. A vase is in the shape of a cylinder with a diameter of 5 inches and a height of 9 inches. What is the volume of the vase? Use 3.14 for  $\pi$ .

\_\_\_\_\_

11. A glass is shaped like a cylinder. The glass has a volume of 602.88 centimeters and a radius of 4 centimeters. What is the height?

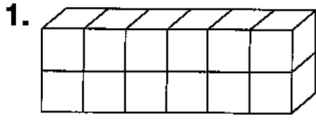
\_\_\_\_\_

12. The base of a triangular prism is a right triangle with hypotenuse 13 inches long and one leg 12 inches long. The height of the prism is 8 inches. What is the volume of the prism?

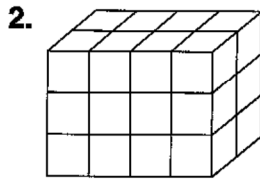
\_\_\_\_\_

**LESSON** **10-2** **Practice B**  
**Volume of Prisms and Cylinders**

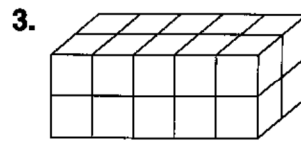
Find how many cubes each prism holds. Then give the prism's volume.



\_\_\_\_\_  
 \_\_\_\_\_

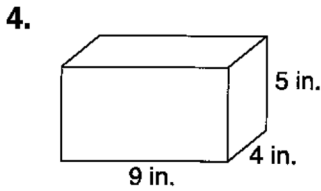


\_\_\_\_\_  
 \_\_\_\_\_

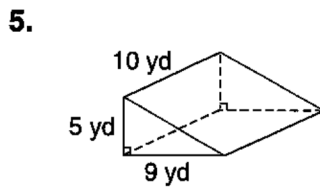


\_\_\_\_\_  
 \_\_\_\_\_

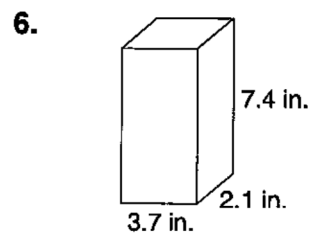
Find the volume of each figure.



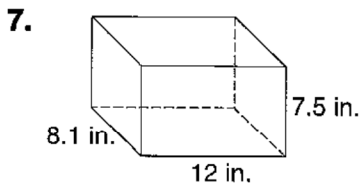
\_\_\_\_\_



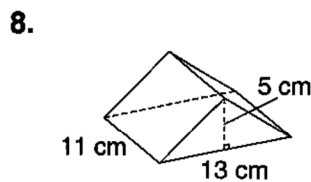
\_\_\_\_\_



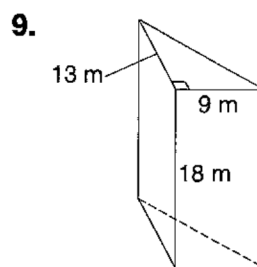
\_\_\_\_\_



\_\_\_\_\_



\_\_\_\_\_



\_\_\_\_\_

10. A travel mug is shaped like a cylinder. It is 9 centimeters wide and 15 centimeters tall. Find its volume to the nearest tenth. Use 3.14 for  $\pi$ .

\_\_\_\_\_