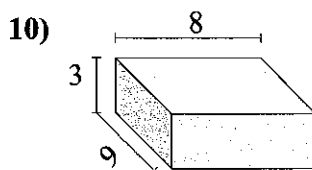
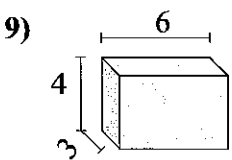
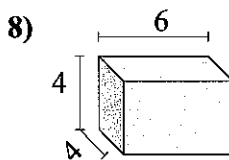
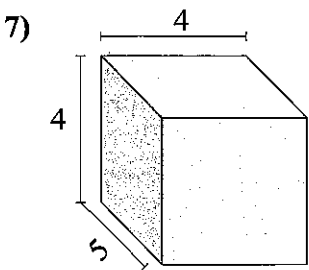
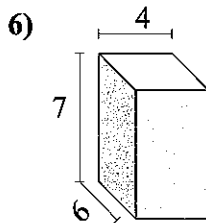
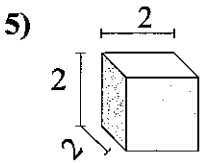
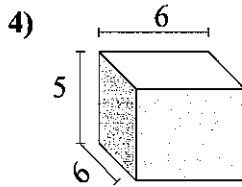
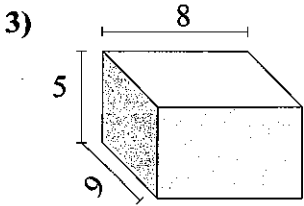
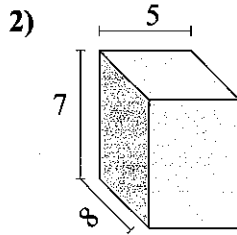
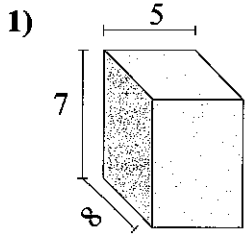




Find the volume of each of the rectangular prisms. Measured in cm (not to scale).

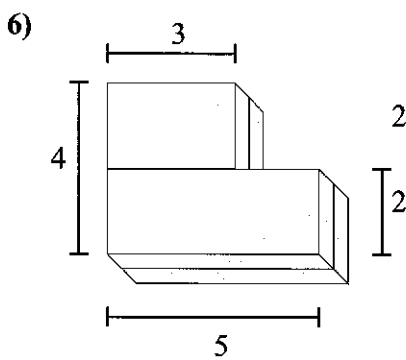
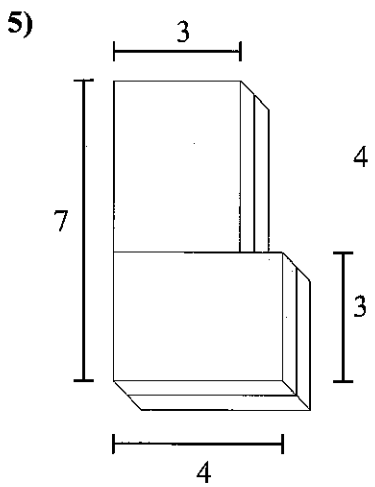
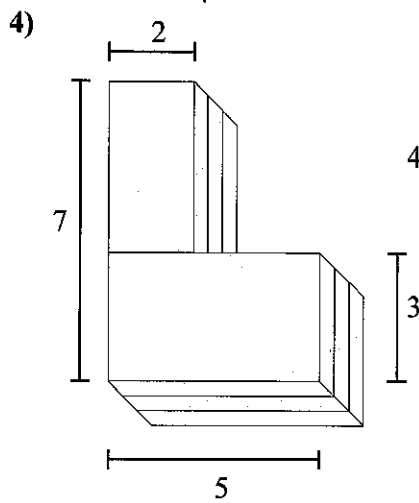
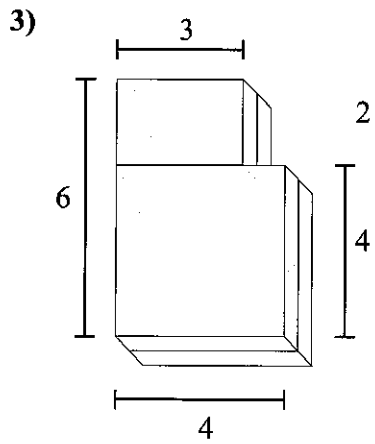
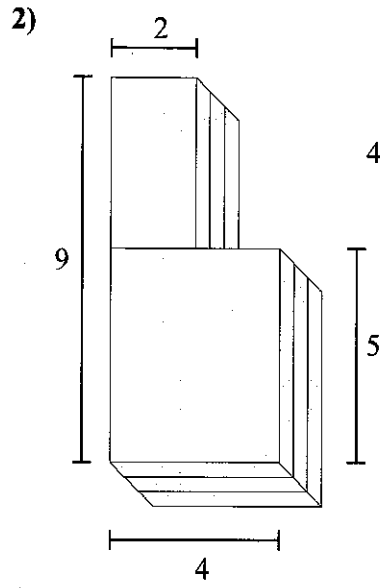
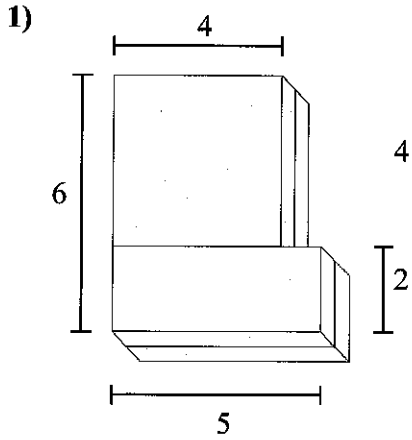


**Answers**

- 1. \_\_\_\_\_
- 2. \_\_\_\_\_
- 3. \_\_\_\_\_
- 4. \_\_\_\_\_
- 5. \_\_\_\_\_
- 6. \_\_\_\_\_
- 7. \_\_\_\_\_
- 8. \_\_\_\_\_
- 9. \_\_\_\_\_
- 10. \_\_\_\_\_



Find the total volume of each figure shown. Measured in cm (not to scale).



**Answers**

1. \_\_\_\_\_
2. \_\_\_\_\_
3. \_\_\_\_\_
4. \_\_\_\_\_
5. \_\_\_\_\_
6. \_\_\_\_\_

Name : \_\_\_\_\_

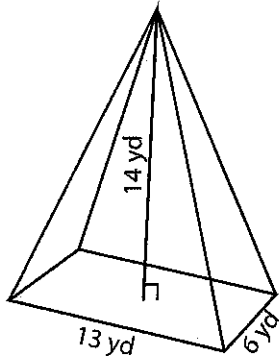
Score : \_\_\_\_\_

### Volume of Rectangular Pyramid

Sheet 1

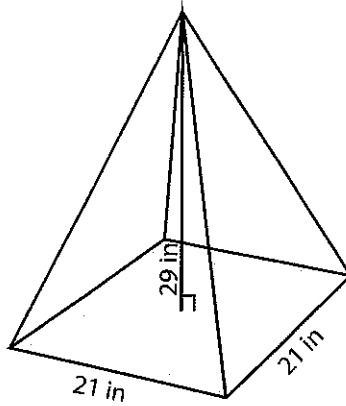
Find the volume of each rectangular pyramid. Round the answer to two decimal places.

1)



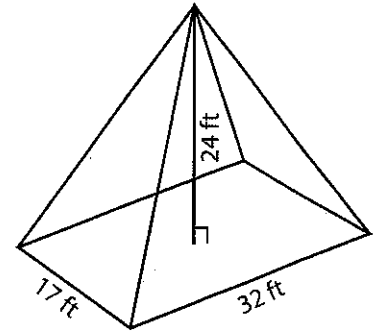
Volume = \_\_\_\_\_

2)



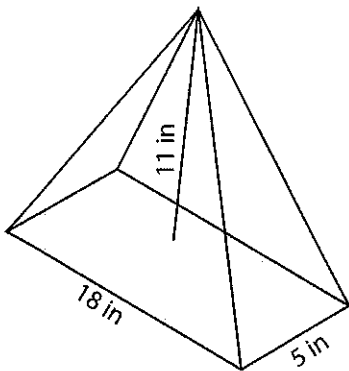
Volume = \_\_\_\_\_

3)



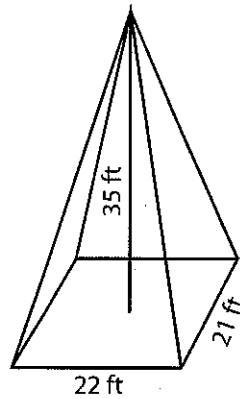
Volume = \_\_\_\_\_

4)



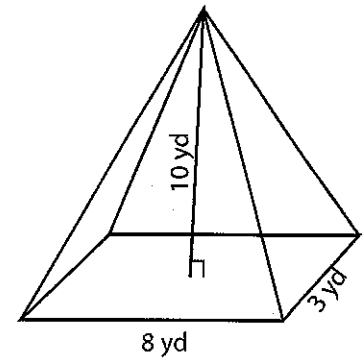
Volume = \_\_\_\_\_

5)



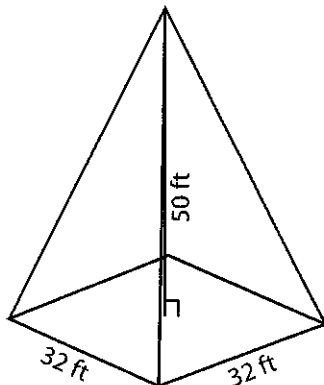
Volume = \_\_\_\_\_

6)



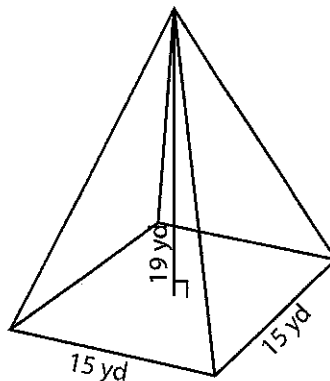
Volume = \_\_\_\_\_

7)



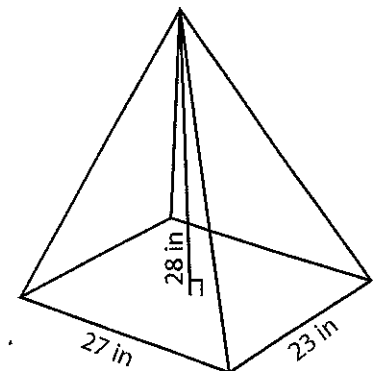
Volume = \_\_\_\_\_

8)



Volume = \_\_\_\_\_

9)



Volume = \_\_\_\_\_

Name : \_\_\_\_\_

Score : \_\_\_\_\_

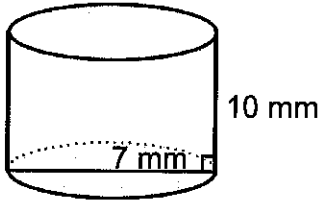
Teacher : \_\_\_\_\_

Date : \_\_\_\_\_

### Volume of Cylinders and Cones

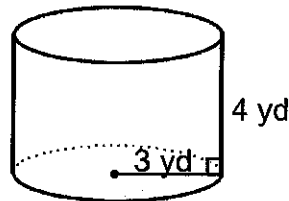
Find the volume of each figure. Round answers to the nearest hundredth, if necessary.

1)



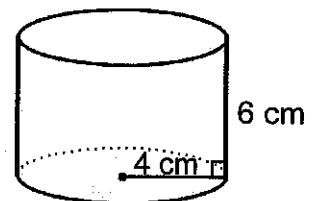
Volume: \_\_\_\_\_

2)



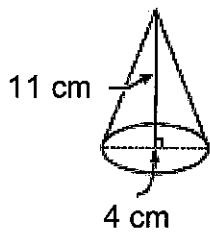
Volume: \_\_\_\_\_

3)



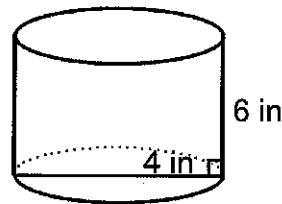
Volume: \_\_\_\_\_

4)



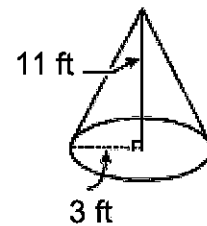
Volume: \_\_\_\_\_

5)



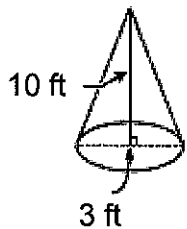
Volume: \_\_\_\_\_

6)



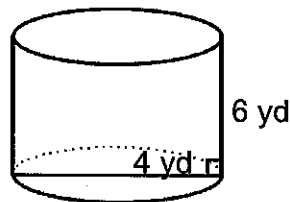
Volume: \_\_\_\_\_

7)



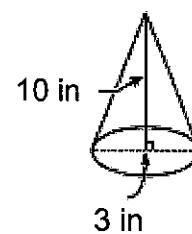
Volume: \_\_\_\_\_

8)



Volume: \_\_\_\_\_

9)



Volume: \_\_\_\_\_



Name : \_\_\_\_\_

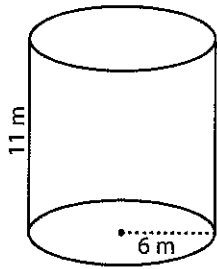
Score : \_\_\_\_\_

**Volume - Cylinder**

ES1

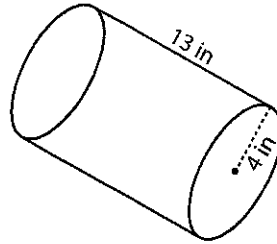
Find the exact volume of each cylinder.

1)



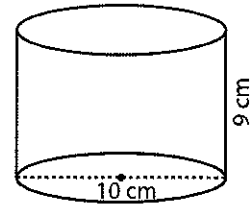
Volume = \_\_\_\_\_

2)



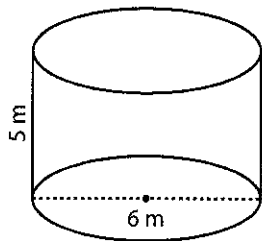
Volume = \_\_\_\_\_

3)



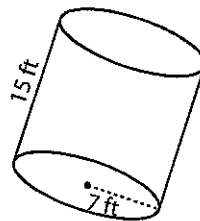
Volume = \_\_\_\_\_

4)



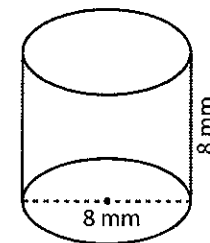
Volume = \_\_\_\_\_

5)



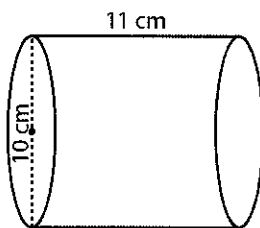
Volume = \_\_\_\_\_

6)



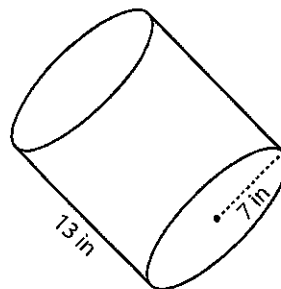
Volume = \_\_\_\_\_

7)



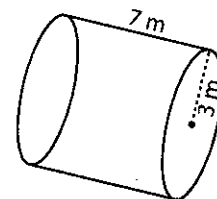
Volume = \_\_\_\_\_

8)



Volume = \_\_\_\_\_

9)



Volume = \_\_\_\_\_

10) The cross-section of a pipe has a width of 6 centimeter and height of 15 centimeter. Calculate the volume of the pipe.

Volume = \_\_\_\_\_

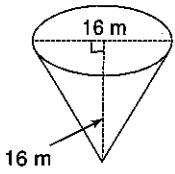
# Volume of Cones

© 2011 Kuta Software LLC. All rights reserved.

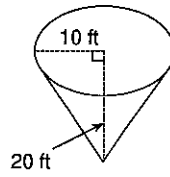
Name \_\_\_\_\_

**Find the volume of each figure. Round your answers to the nearest whole, if necessary.**

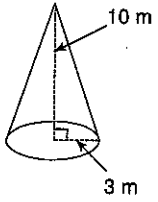
1)



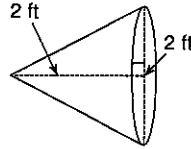
2)



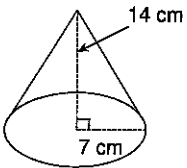
3)



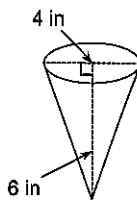
4)



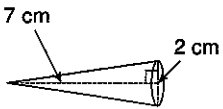
5)



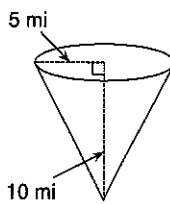
6)



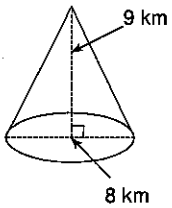
7)



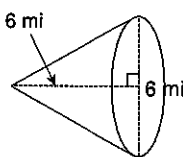
8)



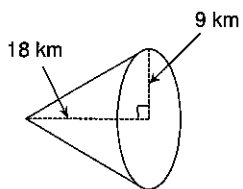
9)



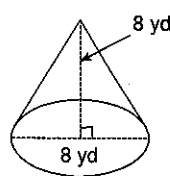
10)



11)



12)

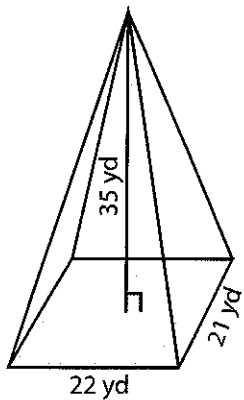


**Volume of Pyramid**

ES1

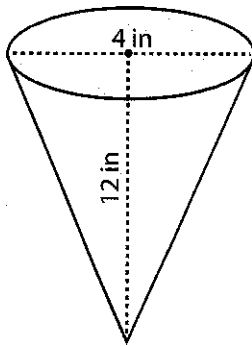
Find the volume of each pyramid. Round the answer to two decimal places.

1)



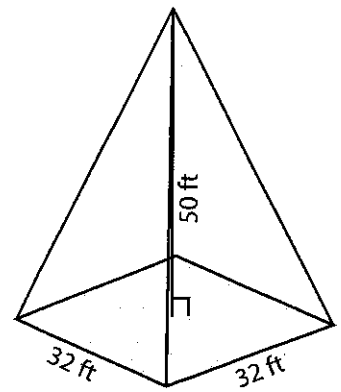
Volume = \_\_\_\_\_

2)



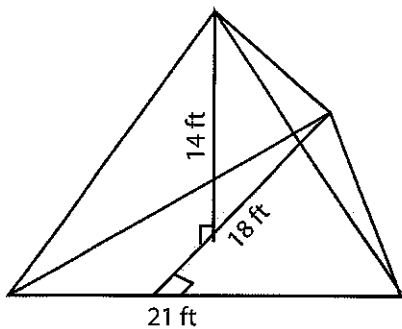
Volume = \_\_\_\_\_

3)



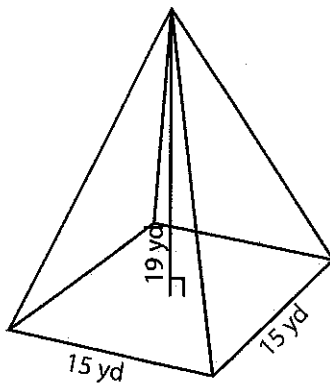
Volume = \_\_\_\_\_

4)



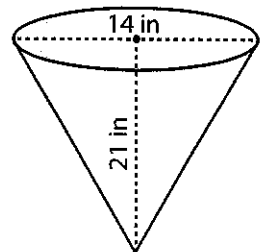
Volume = \_\_\_\_\_

5)



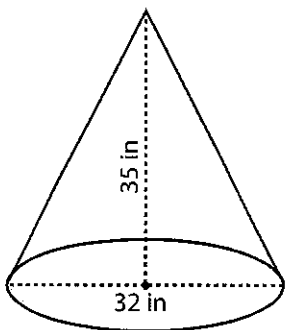
Volume = \_\_\_\_\_

6)



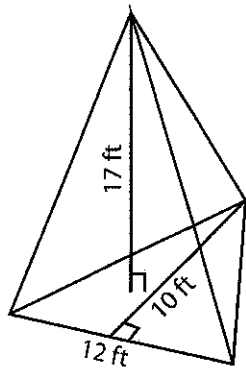
Volume = \_\_\_\_\_

7)



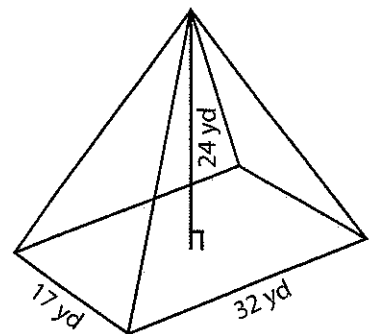
Volume = \_\_\_\_\_

8)



Volume = \_\_\_\_\_

9)



Volume = \_\_\_\_\_

Name : \_\_\_\_\_

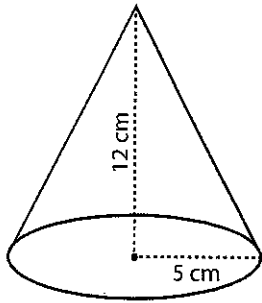
Score : \_\_\_\_\_

**Volume - Cone**

ES1

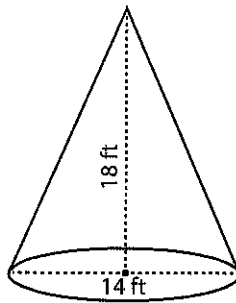
Find the exact volume of each cone.

1)



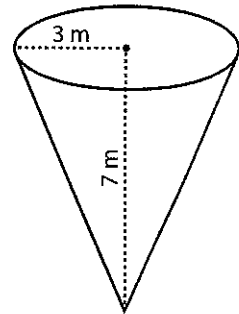
Volume = \_\_\_\_\_

2)



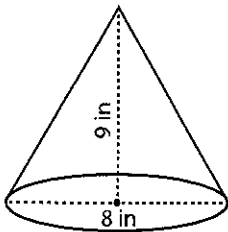
Volume = \_\_\_\_\_

3)



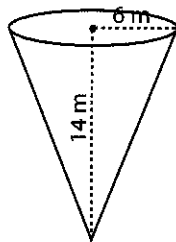
Volume = \_\_\_\_\_

4)



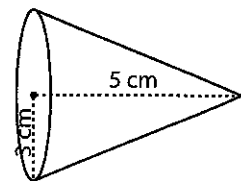
Volume = \_\_\_\_\_

5)



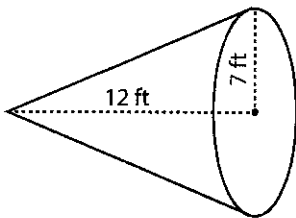
Volume = \_\_\_\_\_

6)



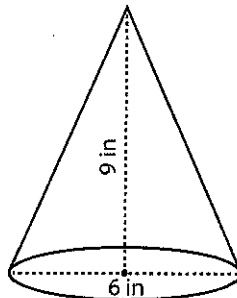
Volume = \_\_\_\_\_

7)



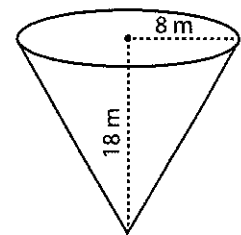
Volume = \_\_\_\_\_

8)



Volume = \_\_\_\_\_

9)



Volume = \_\_\_\_\_

10) A party hat has a diameter of 18 centimeter and a height of 25 centimeter. Find the volume of air it can occupy.

Volume = \_\_\_\_\_



Name: \_\_\_\_\_

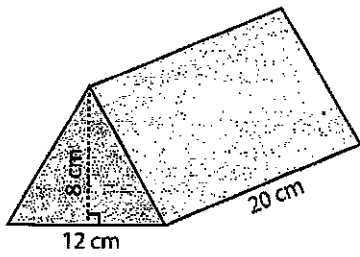
Score: \_\_\_\_\_

### Volume of Triangular Prism

ES1

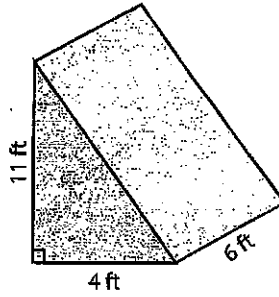
Find the volume of each triangular prism.

1)



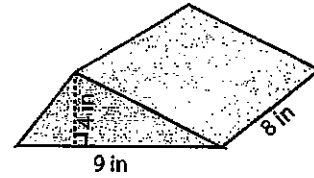
Volume = \_\_\_\_\_

2)



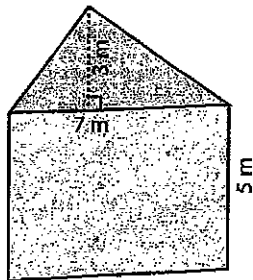
Volume = \_\_\_\_\_

3)



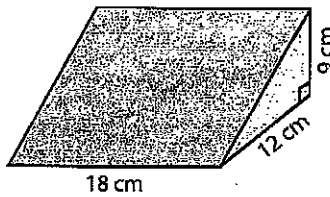
Volume = \_\_\_\_\_

4)



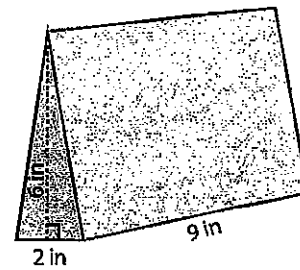
Volume = \_\_\_\_\_

5)



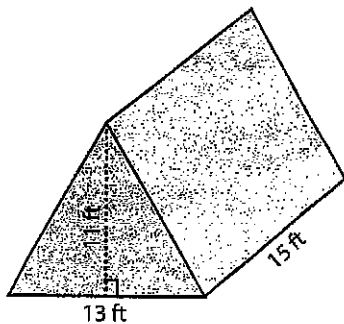
Volume = \_\_\_\_\_

6)



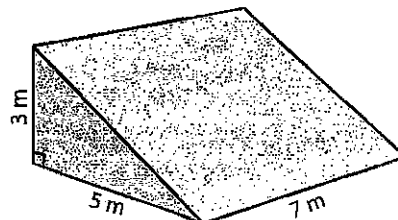
Volume = \_\_\_\_\_

7)



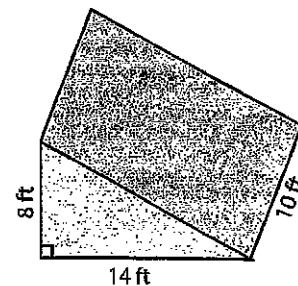
Volume = \_\_\_\_\_

8)



Volume = \_\_\_\_\_

9)



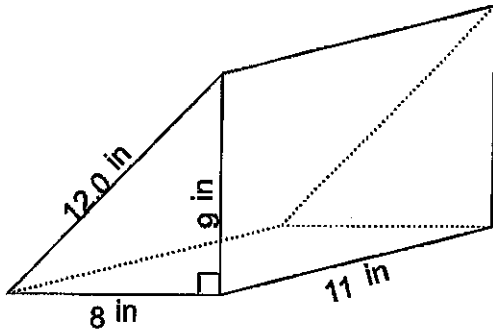
Volume = \_\_\_\_\_



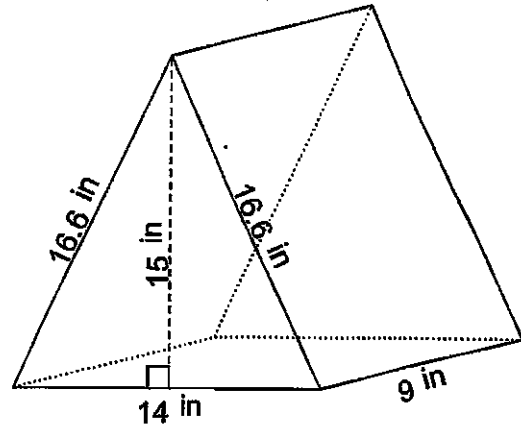
Name: \_\_\_\_\_

# Calculate the Volume

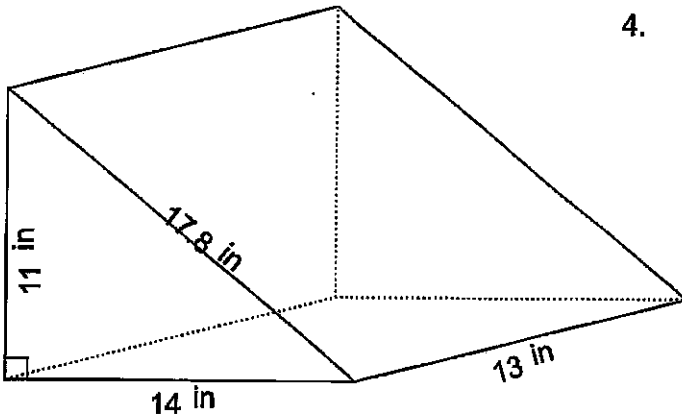
1.



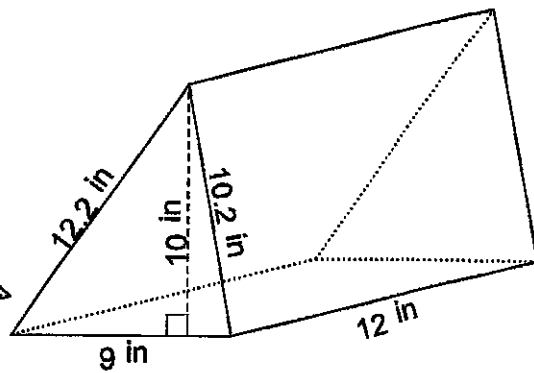
2.



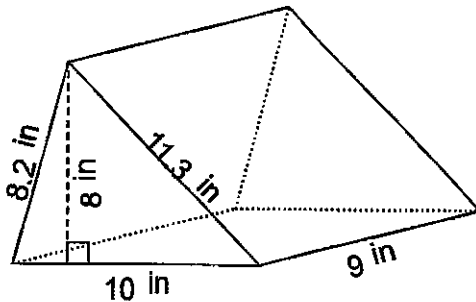
3.



4.



5.



6.

